



Name _____ Date _____

Measurement: U.S. Customary Units

Directions: Cut and paste the boxes at the bottom into the correct columns.

Length	Weight	Volume

Copyright © Eng. Viki's Classroom • www.inglesclassroom.com • All rights reserved.



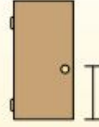



pound (lb)	foot (ft)	ounce (oz)
inch (in.)	quart (qt)	gallon (gal)
pint (pt)	cup (c)	yard (yd)
mile (mi)	ton (T)	



US Customary Measurement | Estimating Units of Measure

Determine which letter best represents the length / height.

Inch (in)	Foot (ft)	Yard (yd)	Mile (mi)
An inch is about the distance of the last joint of your finger.	A foot is 12 inches. The length of a ruler.	1 yard is the same as 3 feet. From the floor to a door knob is about 1 yard.	A mile is 5,280 feet. Most major roads are at least a mile long.
			



- 1) Refrigerator
- A. 1 foot
 - B. 12 inches
 - C. 6 feet
 - D. 4 yards



- 2) Bug
- A. 1 foot
 - B. Less than 1 inch
 - C. 3 yards
 - D. 3 inches



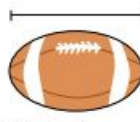
- 3) Bicycle
- A. 10 inches
 - B. 1 yard
 - C. 3 yards
 - D. 3 inches



- 4) Clothes Iron
- A. 2 feet
 - B. 15 inches
 - C. 8 feet
 - D. 6 inches







- 5) Flash Drive
- A. 2 feet
 - B. 2 inches
 - C. 6 inches
 - D. 11 inches



- 6) Football
- A. 2 feet
 - B. 1 inch
 - C. 1 yard
 - D. 11 inches

Determine which letter best represents the volume.

Cup	Pint	Quart	Gallon
A cup is about the amount of milk you get from the cafeteria.	A pint is about the amount you get in a large glass. 1 pint = 2 cups	A quart is about the amount you get in a large milk container. 1 quart = 2 pints	A gallon is the amount that comes in the large plastic container. 1 gallon = 4 quarts
			



- 1) Liquid a spoon holds
- A. Less than a cup
 - B. 1 Cup
 - C. 1 Quart
 - D. 1 Pint



- 2) Ink in a pen
- A. 2 Pints
 - B. 1 Quart
 - C. Less than a Cup
 - D. 1 Gallon



- 3) Cereal Bowl
- A. 4 Pints
 - B. 1 Pint
 - C. 2 Gallons
 - D. 0.5 Gallon



- 4) Sand a wheel barrow holds
- A. 8 Quarts
 - B. 1,000 Grams
 - C. 4 Cups
 - D. 45 Gallons



- 5) Soda in a can
- A. 4 Pints
 - B. 4 Cups
 - C. 1 Gallon
 - D. 1.5 Cups



- 6) Water in a pool
- A. 3,000 Gallons
 - B. 25 Cups
 - C. 5,000 Feet
 - D. 20 Gallons

Determine which letter best represents the weight.

Ounce (oz)

An ounce is about the weight of a slice of bread.



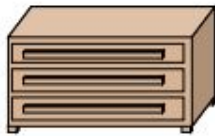
Pound (lb)

A pound is about the weight of a can of vegetables.



Remember:

There are 16 ounces in 1 pound.



- 1) Dresser
A. 150 pounds
B. 30 pounds
C. 10 ounces
D. 3,000 ounces



- 2) Big Screen TV
A. 40 pounds
B. 2,000 pounds
C. 1.25 ounces
D. 160 ounces



- 3) Pen
A. 16 ounces
B. 10 pounds
C. 0.2 ounces
D. 18 ounces



- 4) Lollipop
A. 10 pounds
B. 0.7 ounces
C. 44 pounds
D. 7 ounces



- 5) Phone
A. 0.2 ounces
B. 10 pounds
C. 1 pound
D. 5 pounds



- 6) Recliner
A. 70 pounds
B. 3 ounces
C. 2 pounds
D. 5 ounces